

# Multi-Tasking Staff Havaladar CBIC and CBN Examination Previous year paper 1

## Best Wishes from Mock360

Boost your preparation for the Multi-Tasking Staff Havaladar CBIC and CBN Examination by practicing with previous years' question papers. These resources provide valuable insights into exam patterns and help build confidence. Mock360 wishes you the best in your studies—may this practice lead you to success!

Section : General English

**Q.1** The following sentence has been divided into parts. One of them may contain an error. Select the part that contains the error from the given options. If you don't find any error, mark 'No error' as your answer.

The mountain lion is / one of the slyest and more / elusive animals in the woods.

- Ans  1. one of the slyest and more  
 2. No error  
 3. The mountain lion is  
 4. elusive animals in the woods.

Question ID : 26433051618  
Status : Answered  
Chosen Option : 1

**Q.2** Select the correctly spelt word.

- Ans  1. Envisaige  
 2. Psychologist  
 3. Emergense  
 4. Trancition

Question ID : 26433051362  
Status : Answered  
Chosen Option : 2

**Q.3** Select the most appropriate ANTONYM of the given word.

Overrun

- Ans  1. Surrender  
 2. Inundate  
 3. Storm  
 4. Invade

Question ID : 26433051739  
Status : Answered  
Chosen Option : 1



Q.4 Select the most appropriate option to fill in the blank.

Many people may not find the rewards\_\_\_\_\_with the time and effort required.

- Ans  1. insignificant  
 2. gleeful  
 3. cautious  
 4. commensurate

Question ID : 26433051676  
 Status : Answered  
 Chosen Option : 1

Q.5 Select the most appropriate option to fill in the blank.

If we don't reverse course now, will anyone take anything we say about justice and \_\_\_\_\_with any seriousness for decades to come?

- Ans  1. righteousness  
 2. mediation  
 3. wickedness  
 4. dishonesty

Question ID : 26433051823  
 Status : Answered  
 Chosen Option : 4

Q.6 Select the most appropriate meaning of the underlined idiom in the given sentence.

He is foaming at the mouth about the committee's decision.

- Ans  1. To be enraged and show it  
 2. to cause damage to someone  
 3. to not recognize something good  
 4. to be upset about something that happened in the past

Question ID : 26433051689  
 Status : Answered  
 Chosen Option : 4

Q.7 Select the correctly spelt word.

- Ans  1. Disstract  
 2. Destarct  
 3. Distract  
 4. Distarct

Question ID : 26433050598  
 Status : Answered  
 Chosen Option : 3



Q.8 Select the most appropriate synonym of the given word.

Probe

- Ans  1. Search  
 2. Motivate  
 3. Invite  
 4. Push

Question ID : 26433051486  
Status : Answered  
Chosen Option : 1

Q.9 Select the option that will improve the underlined part of the sentence. In case no improvement is needed, select 'No improvement required'.

You are looking so pretty on these black outfit.

- Ans  1. pretty in this  
 2. No improvement required  
 3. prettier in these  
 4. prettiest with those

Question ID : 26433050509  
Status : Answered  
Chosen Option : 1

Q.10 Select the most appropriate option to fill in the blank.

He is the patient \_\_\_\_\_ called you in the morning.

- Ans  1. which  
 2. whom  
 3. who  
 4. that

Question ID : 26433050953  
Status : Answered  
Chosen Option : 3

Q.11 The following sentence has been divided into parts. One of them may contain an error. Select the part that contains the error from the given options. If you don't find any error, mark 'No error' as your answer.

They finally did what / we advice them to do / before the final match.

- Ans  1. we advice them to do  
 2. before the final match  
 3. They finally did what  
 4. No error

Question ID : 26433051469  
Status : Answered  
Chosen Option : 3



**Q.12** Select the option that can be used as a one-word substitute for the given group of words.

Made in imitation so as to be passed off fraudulently as genuine

- Ans  1. Counterfeit  
 2. Staunch  
 3. Authentic  
 4. Deliberate

Question ID : 26433051405  
Status : Answered  
Chosen Option : 1

**Q.13** Select the most appropriate option to fill in the blank.

Many people like playing cricket, but \_\_\_\_\_ my opinion, it is too chaotic.

- Ans  1. in  
 2. from  
 3. for  
 4. with

Question ID : 26433051753  
Status : Answered  
Chosen Option : 1

**Q.14** Select the most appropriate ANTONYM of the given word.

Impure

- Ans  1. Contaminated  
 2. Segregated  
 3. Sterile  
 4. Concentrated

Question ID : 26433050590  
Status : Answered  
Chosen Option : 2

**Q.15** The following sentence has been split into four segments. Identify the segment that contains a grammatical error.

If you plant a seed, / you will be noticed / that it takes some / time to grow.

- Ans  1. that it takes some  
 2. If you plant a seed  
 3. you will be noticed  
 4. time to grow

Question ID : 26433051341  
Status : Answered  
Chosen Option : 1



Q.16 Select the most appropriate meaning of the given idiom.

Back on one's feet

- Ans  1. To support the losing side  
 2. Relive previous moments  
 3. Well or successful again  
 4. Forced to begin something again

Question ID : 26433051045  
Status : Answered  
Chosen Option : 4

Q.17 Select the most appropriate option to fill in the blank.

This cruise ship \_\_\_\_\_ in November and December.

- Ans  1. sails  
 2. sells  
 3. sales  
 4. seals

Question ID : 26433051025  
Status : Answered  
Chosen Option : 2

Q.18 Select the most appropriate option to fill in the blank.

If you want to save your money, start living an \_\_\_\_\_ life.

- Ans  1. improper  
 2. economical  
 3. extravagant  
 4. indulgent

Question ID : 26433050922  
Status : Answered  
Chosen Option : 2

Q.19 Select the most appropriate synonym of the given word.

Clandestine

- Ans  1. Blatant  
 2. Ornate  
 3. Open  
 4. Undercover

Question ID : 26433051815  
Status : Not Answered  
Chosen Option : --



**Q.20** Select the option that will improve the underlined part of the given sentence. In case no improvement is needed, select 'No improvement required'.

In India, processed foods becomes popular in the 20th century.

- Ans  1. became popular in  
 2. become popularity in  
 3. No improvement required  
 4. become popular at

Question ID : 26433050910  
Status : Answered  
Chosen Option : 1

**Comprehension:**

In the following passage, some words have been deleted. Read the passage carefully and select the most appropriate option to fill in each blank.

The Ministry of Defence has (1)\_\_\_\_\_the formal Government Sanction Letter (2) \_\_\_\_\_ grant of permanent commission (PC) to women officers in the Army. "In anticipation, the Army Headquarters had (3)\_\_\_\_\_in motion a series of preparatory actions for conduct of the Permanent Commission Selection Board for affected women officers. The Selection Board will be scheduled as (4)\_\_\_\_\_as all affected Short Service Commissioned (SSC) women officers exercise their option and complete (5)\_\_\_\_\_documentation," the Army said in a statement.

**SubQuestion No : 21**

**Q.21** Select the most appropriate option to fill in blank number 1.

- Ans  1. imbibed  
 2. accused  
 3. extracted  
 4. issued

Question ID : 26433051808  
Status : Answered  
Chosen Option : 4

**Comprehension:**

In the following passage, some words have been deleted. Read the passage carefully and select the most appropriate option to fill in each blank.

The Ministry of Defence has (1)\_\_\_\_\_the formal Government Sanction Letter (2) \_\_\_\_\_ grant of permanent commission (PC) to women officers in the Army. "In anticipation, the Army Headquarters had (3)\_\_\_\_\_in motion a series of preparatory actions for conduct of the Permanent Commission Selection Board for affected women officers. The Selection Board will be scheduled as (4)\_\_\_\_\_as all affected Short Service Commissioned (SSC) women officers exercise their option and complete (5)\_\_\_\_\_documentation," the Army said in a statement.

**SubQuestion No : 22**

**Q.22** Select the most appropriate option to fill in blank number 2.

- Ans  1. since  
 2. from  
 3. for  
 4. to

Question ID : 26433051809  
Status : Answered  
Chosen Option : 3



**Comprehension:**

In the following passage, some words have been deleted. Read the passage carefully and select the most appropriate option to fill in each blank.

The Ministry of Defence has (1)\_\_\_\_\_the formal Government Sanction Letter (2) \_\_\_\_\_ grant of permanent commission (PC) to women officers in the Army. "In anticipation, the Army Headquarters had (3)\_\_\_\_\_in motion a series of preparatory actions for conduct of the Permanent Commission Selection Board for affected women officers. The Selection Board will be scheduled as (4)\_\_\_\_\_as all affected Short Service Commissioned (SSC) women officers exercise their option and complete (5)\_\_\_\_\_documentation," the Army said in a statement.

**SubQuestion No : 23****Q.23 Select the most appropriate option to fill in blank number 3.**

- Ans  1. deposited  
 2. set  
 3. located  
 4. situated

Question ID : 26433051810

Status : Answered

Chosen Option : 2

**Comprehension:**

In the following passage, some words have been deleted. Read the passage carefully and select the most appropriate option to fill in each blank.

The Ministry of Defence has (1)\_\_\_\_\_the formal Government Sanction Letter (2) \_\_\_\_\_ grant of permanent commission (PC) to women officers in the Army. "In anticipation, the Army Headquarters had (3)\_\_\_\_\_in motion a series of preparatory actions for conduct of the Permanent Commission Selection Board for affected women officers. The Selection Board will be scheduled as (4)\_\_\_\_\_as all affected Short Service Commissioned (SSC) women officers exercise their option and complete (5)\_\_\_\_\_documentation," the Army said in a statement.

**SubQuestion No : 24****Q.24 Select the most appropriate option to fill in blank number 4.**

- Ans  1. soon  
 2. late  
 3. long  
 4. blind

Question ID : 26433051811

Status : Answered

Chosen Option : 1



**Comprehension:**

In the following passage, some words have been deleted. Read the passage carefully and select the most appropriate option to fill in each blank.

The Ministry of Defence has (1)\_\_\_\_\_the formal Government Sanction Letter (2) \_\_\_\_\_ grant of permanent commission (PC) to women officers in the Army. "In anticipation, the Army Headquarters had (3)\_\_\_\_\_in motion a series of preparatory actions for conduct of the Permanent Commission Selection Board for affected women officers. The Selection Board will be scheduled as (4)\_\_\_\_\_as all affected Short Service Commissioned (SSC) women officers exercise their option and complete (5)\_\_\_\_\_documentation," the Army said in a statement.

**SubQuestion No : 25**

**Q.25 Select the most appropriate option to fill in blank number 5.**

- Ans  1. unnecessary  
 2. optional  
 3. gratuitous  
 4. requisite

Question ID : 26433051812

Status : Answered

Chosen Option : 4

Section : General Intelligence and Reasoning

**Q.1 Identify the number that does NOT belong to the following series.**

30, 15, 15, 22.5, 46, 112.5

- Ans  1. 46  
 2. 112.5  
 3. 22.5  
 4. 30

Question ID : 26433048944

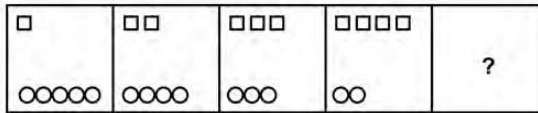
Status : Answered

Chosen Option : 1


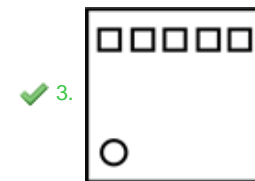
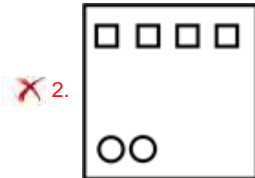
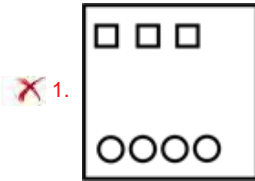




**Q.2** Select the figure from among the given options that can replace the question mark (?) in the following series.



Ans



Question ID : 26433047987  
 Status : Answered  
 Chosen Option : 3

**Q.3** Select the option that is related to the fifth letter-cluster in the same way as the second letter-cluster is related to the first letter-cluster and the fourth letter-cluster is related to the third letter-cluster.

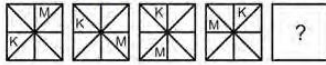
VOCAL : CVJHS :: TROOF : AYVVM :: RTAGE : ?

- Ans
- 1. YAHNM
  - 2. YAHML
  - 3. YAHNN
  - 4. YAHNL

Question ID : 26433048344  
 Status : Answered  
 Chosen Option : 4



**Q.4** Select the figure from among the given options that can replace the question mark (?) in the following series.



**Ans**

✓ 1.



✗ 2.



✗ 3.



✗ 4.



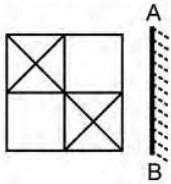
Question ID : 26433048734

Status : Answered

Chosen Option : 1

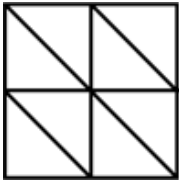


Q.5 Select the correct mirror image of the given figure when the mirror is placed at line AB as shown.

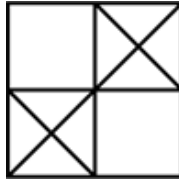


Ans

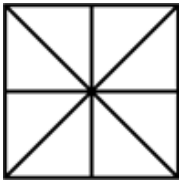
1.



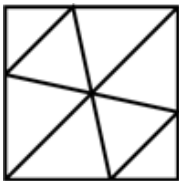
2.



3.



4.



Question ID : 26433048165

Status : Answered

Chosen Option : 2

Q.6 If 'White' is called 'Blue', 'Blue' is called 'Red', 'Red' is called 'Yellow', 'Yellow' is called 'Green', 'Green' is called 'Black', 'Black' is called 'Violet', and 'Violet' is called 'Orange', then what would be the colour of human blood?

Ans  1. Yellow

2. Violet

3. Red

4. Green

Question ID : 26433049121

Status : Answered

Chosen Option : 1



Q.7 Select the number from among the given options that can replace the question mark (?) in the following series.

632, 637, 644, 653, 664, ?

Ans  1. 677

2. 687

3. 679

4. 681

Question ID : 26433048718

Status : Answered

Chosen Option : 1

Q.8 Read the given statements and conclusions carefully. Assuming that the information given in the statements is true, even if it appears to be at variance with commonly known facts, decide which of the given conclusions logically follow(s) from the statements.

Statements:

Some mocks are exams.

Some exams are banks.

No bank is a local.

Conclusions:

I. Some mocks are local.

II. No mock is a local.

Ans  1. Neither conclusion I nor II follows

2. Only conclusion I follows

3. Only conclusion II follows

4. Either conclusion I or II follows

Question ID : 26433049125

Status : Answered

Chosen Option : 4

Q.9 Four boys R, S, T and U are sitting in a row, facing towards the south (but not necessarily in the same order). Four girls A, B, C and D are sitting in a row, facing towards the face of these boys (but not necessarily in the same order). C and R are diagonally opposite to each other. A and S are diagonally opposite to each other. T is the immediate neighbour of R. D is the immediate neighbour of C. Who is facing D?

Ans  1. S

2. T

3. U

4. R

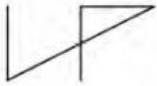
Question ID : 26433048730

Status : Answered

Chosen Option : 3



Q.10 Select the option in which the given figure is embedded (rotation is NOT allowed).

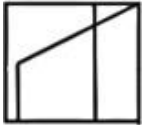


Ans

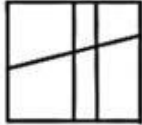
1.




2.



3.



4.



Question ID : 26433049135

Status : Answered

Chosen Option : 4

Q.11 Which two numbers (not digits) need to be interchanged to make the given equation correct?

$$83 + 711 - 95 \div 9 \times 2 = 20$$

Ans  1. 9 and 2

2. 711 and 95

3. 95 and 83

4. 2 and 83

Question ID : 26433048840

Status : Answered

Chosen Option : 2

Q.12 Select the option that is related to the fifth term in the same way as the second term is related to the first term and the fourth term is related to the third term.

THROW : XPSIU :: QUICK : LDJVR :: LIGHT : ?

Ans  1. UIHLM

2. UIHJM

3. UIHKM

4. UIHJN

Question ID : 26433047970

Status : Answered

Chosen Option : 2



Q.13 Select the option that is related to the third number in the same way as the second number is related to the first number and sixth number is related to the fifth number.

6 : 232 :: 8 : ? :: 10 : 1016

- Ans  1. 520  
 2. 535  
 3. 540  
 4. 528

Question ID : 26433049129  
Status : Answered  
Chosen Option : 4

Q.14 The speeds of seven cars C1, C2, C3, C4, C5, C6 and C7 are compared. All cars have different speeds. The speed of C1 is more than only two cars. The speed of C6 is more than C4 and less than C5. The speeds of C2 and C3 are the highest and the lowest, respectively. The speed of C4 is more than C1. The speed of how many cars is less than C7?

- Ans  1. 5  
 2. 2  
 3. 4  
 4. 1

Question ID : 26433048957  
Status : Answered  
Chosen Option : 4

Q.15 Select the option that is related to the fifth number in the same way as the second number is related to the first number and the fourth number is related to the third number.

123 : 616 :: 147 : 736 :: 211 : ?

- Ans  1. 1056  
 2. 1046  
 3. 996  
 4. 1036

Question ID : 26433047983  
Status : Answered  
Chosen Option : 1

Q.16 Select the letter-cluster that can replace the question mark (?) in the following series.

GOAL, IMCJ, KKEH, MIGF, ?

- Ans  1. OHID  
 2. OGJD  
 3. OGIC  
 4. OGID

Question ID : 26433048852  
Status : Answered  
Chosen Option : 4



Q.17 In a certain code language, '321' means 'cold filtered coffee', '653' means 'very cold day' and '985' means 'day and night'. What is the code for 'very' in the same language?

- Ans  1. 5  
 2. 3  
 3. 9  
 4. 6

Question ID : 26433047923  
 Status : Answered  
 Chosen Option : 4

Q.18 In a certain code language, 'grapes are multi red' is coded as '8 6 4 3', 'red people eat mango' is coded as '7 4 5 2' and 'mango multi apple' is coded as '3 5 0'. How will 'red apple' be coded in that language?

- Ans  1. 8 5  
 2. 4 0  
 3. 5 0  
 4. 8 6

Question ID : 26433048923  
 Status : Answered  
 Chosen Option : 2

Q.19 Select the figure from the options that can replace the question mark (?) and complete the pattern (rotation is not allowed).



- Ans  1.   
 2.   
 3.   
 4.

Question ID : 26433048663  
 Status : Answered  
 Chosen Option : 1



Q.20 After interchanging the given two signs and two numbers, what will be the value of the following expression?

÷ and +; 7 and 15  
 $5 \div 35 + 15 \times 6 - 7 = ?$

- Ans  1. 40  
 2. 30  
 3. 20  
 4. 10

Question ID : 26433048939  
Status : Answered  
Chosen Option : 3

Q.21 Select the option that is related to the third word in the same way as the second word is related to the first word.

Canberra : Australia :: Doha : ?

- Ans  1. Qatar  
 2. Iran  
 3. Yemen  
 4. Kuwait

Question ID : 26433049117  
Status : Answered  
Chosen Option : 1

Q.22 Read the given statements and conclusions carefully. Assuming that the information given in the statements is true, even if it appears to be at variance with commonly known facts, decide which of the given conclusions logically follow(s) from the statements.

Statements:  
No 90s are 80s.  
Some 90s are 40s.  
All 80s are 70s.

Conclusions:  
I. All 80s being 40s is a possibility.  
II. Some 70s are not 90s.

- Ans  1. Only conclusion II follows.  
 2. Only conclusion I follows.  
 3. Both conclusions I and II follow.  
 4. Neither conclusion I nor II follow.

Question ID : 26433047980  
Status : Answered  
Chosen Option : 2





Q.23 In a certain code language, 'DETAIL' is written as 'FCVYKJ' and 'HEALTH' is written as 'JCCJVF'. How will 'MOTION' be written in that language?

- Ans  1. OMVGPL  
 2. OMVQOM  
 3. OMVGQL  
 4. OMVGRL

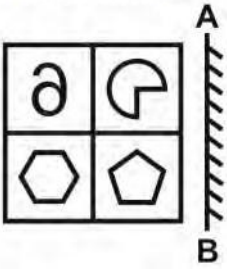
Question ID : 26433048347

Status : Answered

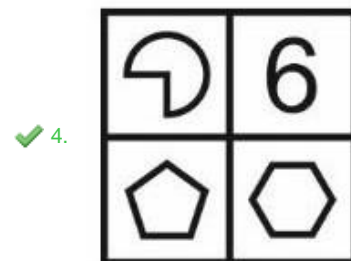
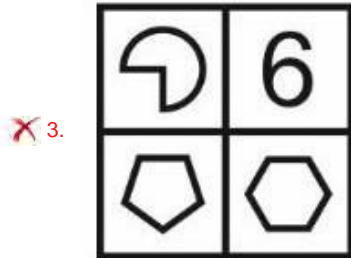
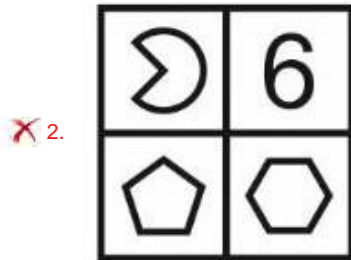
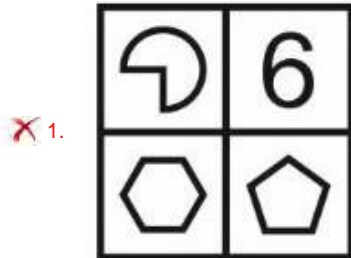
Chosen Option : 3



Q.24 Select the correct mirror image of the given figure when the mirror is placed to its right side.



Ans



Question ID : 26433049061

Status : Answered

Chosen Option : 4



**Q.25** Seven girls A, B, C, D, E, F and G are sitting around a circular table facing opposite the centre (not necessarily in the same order). E is second to the right of A. C is the immediate neighbour of E. D is third to the right of C. B is the immediate neighbour of E and A. F is fourth to the right of A.  
Which of the following statements is correct?  
I. D is next to the right of G.  
II. A is third to the left of B.

- Ans  1. Only II  
 2. Both I and II  
 3. Only I  
 4. Neither I nor II

Question ID : 26433048956  
Status : Answered  
Chosen Option : 3

Section : Numerical Aptitude

**Q.1** The average marks obtained in a test by three students is  $x$ . If the marks of a new student is also considered, then the average marks increases by 2. What is the marks secured by the new student in the test?

- Ans  1.  
 2.  $x + 6$   
 3.  $x + 8$   
 4.  $x + 2$

Question ID : 26433049628  
Status : Answered  
Chosen Option : 3

**Q.2** In a partnership business, A and B invested in the ratio of 5:6. At the end of 8 months A withdrew his capital. If they shared the eventual profit in the ratio of 5:9, then what is the number of months for which B invested his capital?

- Ans  1.  
 2. 10 months  
 3. 12 months  
 4. 11 months

Question ID : 26433050280  
Status : Answered  
Chosen Option : 3

**Q.3** During a journey a person travels half of the distance at a speed of 18 km/h and the remaining half of the journey at a speed of 22 km/h. What is his average speed for the entire journey?

- Ans  1.  
 2. 20.2 km/h  
 3. 19.2 km/h  
 4. 19.8 km/h

Question ID : 26433050045  
Status : Answered  
Chosen Option : 4



**Q.4**  $D_1$  and  $D_2$  can do a piece of work together in 16 days,  $D_2$  and  $D_3$  can do the same work together in 24 days, while  $D_3$  and  $D_1$  can do it together in 48 days. In how many days can all 3, working together, do  $\frac{5}{6}$  of the work?

- Ans
- 1.  $\frac{31}{3}$  days
  - 2.  $\frac{40}{3}$  days
  - 3.  $\frac{35}{3}$  days
  - 4.  $\frac{38}{3}$  days

Question ID : 26433049819  
Status : Answered  
Chosen Option : 2

**Q.5** E% of 12.5% of 480 = 72. What is the value of E?

- Ans
- 1.
  - 2. 110
  - 3. 105
  - 4. 120

Question ID : 26433049750  
Status : Answered  
Chosen Option : 4

**Q.6** In a job,  $Z_1$ ,  $Z_2$  and  $Z_3$  work for 8, 10 and 15 days, respectively. The ratio of the daily wages of  $Z_1$ ,  $Z_2$  and  $Z_3$  is 3 : 4 : 4, respectively. If they receive ₹4,960 as total wages for the work done, then what is the combined share of  $Z_2$  and  $Z_3$  in the total wages received?

- Ans
- 1. ₹4,800
  - 2. ₹4,000
  - 3. ₹4,400
  - 4. ₹4,200

Question ID : 26433049893  
Status : Answered  
Chosen Option : 2

**Q.7** The area of the base of a solid cone is  $616 \text{ cm}^2$ . If the height of the cone is 15 cm, then what is the volume of this cone?

- Ans
- 1.  $2940 \text{ cm}^3$
  - 2.  $3440 \text{ cm}^3$
  - 3.  $3190 \text{ cm}^3$
  - 4.  $3080 \text{ cm}^3$

Question ID : 26433049636  
Status : Answered  
Chosen Option : 4



Q.8 What is the value of A, if  $A = [50 - 4 \times 5 + \{6 \div 3 - 1\}]$ ?

- Ans  1.
2. 71
3. 31
4. 29

Question ID : 26433049319  
Status : Answered  
Chosen Option : 3

Q.9 Study the given table and answer the question that follows.  
The table below shows the percentage distribution of students from five different colleges in various disciplines.

DISCIPLINES	COLLEGES				
	P	Q	R	S	T
SCIENCE	25	35	45	28	35
ECONOMICS	45	40	15	42	25
MATHEMATICS	30	25	40	30	40
TOTAL NUMBER OF STUDENTS	8000	10000	15000	9000	11000

Students from the discipline of mathematics in colleges P and R taken together is what percentage of the total number of students in colleges P and R taken together? [Give your answer correct to one decimal place.]

- Ans  1.
2. 36.5%
3. 37.2%
4. 37.5%

Question ID : 26433050287  
Status : Answered  
Chosen Option : 2

Q.10 A boat can travel 5 km upstream in 15 minutes. If the ratio of the speed of the boat in still water to the speed of the stream is 6 : 1, then how much time will the boat take to cover 19.6 km downstream?

- Ans  1.
2. 26 minutes
3. 42 minutes
4. 31 minutes

Question ID : 26433050284  
Status : Answered  
Chosen Option : 3



**Q.11** A retailer bought 50 kg of Arhar Dal at a discount of 20%. Another 2 kg of Arhar dal was offered to him for free by the wholesaler on the purchase of 50 kg of the dal. If the retailer sells the entire quantity of the dal at the marked price to a customer, what is the profit percentage gained by the retailer?

- Ans**  1.  
 2. 22%  
 3. 12%  
 4. 15%

Question ID : 26433050178  
Status : Answered  
Chosen Option : 1

**Q.12** There are 32 consecutive natural numbers. The average of the first 13 numbers is  $x$ . What is the average of the next 19 numbers?

- Ans**  1.  
 2.  $x + 16$   
 3.  $x + 17$   
 4.  $x + 18$

Question ID : 26433050371  
Status : Answered  
Chosen Option : 2

**Q.13** The ratio of two numbers is 3 : 7. The sum of the two numbers is 180. What is the positive difference between the two numbers?

- Ans**  1.  
 2. 72  
 3. 85  
 4. 78

Question ID : 26433050055  
Status : Answered  
Chosen Option : 2

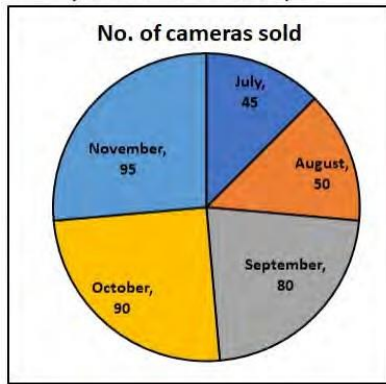
**Q.14** What is the LCM of two numbers, whose product is 432 and HCF is 6?

- Ans**  1.  
 2. 48  
 3. 78  
 4. 72

Question ID : 26433050445  
Status : Answered  
Chosen Option : 4



**Q.15** The following pie chart gives the central angles of the sectors representing the number of cameras sold from a shop from July to November in a certain year.



What percentage are the sales in July of the total sales from July to November?

- Ans
- 1.
  - 2. 50%
  - 3. 12.5%
  - 4. 20%

Question ID : 26433049339  
Status : Answered  
Chosen Option : 3

**Q.16** The compound interest on ₹20,000 at 5% per annum, compounded annually, is ₹2,050. What is the time period?

- Ans
- 1. 2.5 years
  - 2. 2 years
  - 3. 4 years
  - 4. 3 years

Question ID : 26433050457  
Status : Answered  
Chosen Option : 2



Q.17

What is the value of  $\frac{7}{8} + \frac{8}{11}$  of  $\left[ \frac{33}{16} - \frac{5}{12} + \left( \frac{6}{11} - \frac{5}{12} + \frac{7}{22} \right) \right]$  ?

Ans

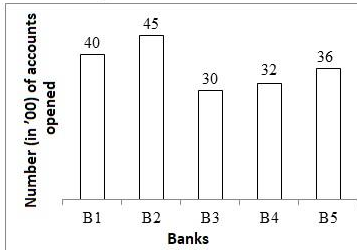
- 1.  $\frac{6871}{3605}$
- 2.  $\frac{6805}{2987}$
- 3.  $\frac{6907}{3971}$
- 4.  $\frac{6961}{2904}$

Question ID : 26433050064

Status : Answered

Chosen Option : 4

Q.18 The following bar chart shows the number of accounts (in '00) opened in a month by 5 banks.



The average money in each account of B1, B3 and B5 is ₹500. The average money in each account of B2 and B4 is ₹1,000. How much money is there in all the accounts that have been opened during the given month, in all the 5 banks, taken together?

- Ans
- 1. ₹1,30,00,000
  - 2. ₹1,20,00,000
  - 3. ₹1,25,00,000
  - 4. ₹1,45,00,000

Question ID : 26433050066

Status : Answered

Chosen Option : 1

Q.19 If the cost price of 15 pencils is equal to the selling price of 10 pencils, what is the gain or loss percentage?

- Ans
- 1. 20% gain
  - 2. 30% loss
  - 3. 50% gain
  - 4. 40% loss

Question ID : 26433049327

Status : Answered

Chosen Option : 3





**Q.20** Sandeep buys a toy car for ₹500 and sells it for ₹625. What is his gain or loss percentage?

- Ans
- 1. 20% gain
  - 2. 20% loss
  - 3. 25% gain
  - 4. 25% loss

Question ID : 26433050451  
Status : Answered  
Chosen Option : 3

**Q.21** If the rate of interest is 4% for the first year, 5% for the second year and 6% for the third year, then find the compound interest on ₹10,000 for 3 years, if interest is compounded annually?

- Ans
- 1. ₹1,580.25
  - 2. ₹1,575.20
  - 3. ₹1,500.00
  - 4. ₹1,570.50

Question ID : 26433050181  
Status : Answered  
Chosen Option : 2

**Q.22** Anjali decided to spend 45% of her salary on shopping. On completion of her shopping, she realised that she had spent only ₹11,475, which was 60% of what she had decided to spend. How much is Anjali's salary?

- Ans
- 1. ₹40,800
  - 2. ₹29,600
  - 3. ₹38,400
  - 4. ₹42,500

Question ID : 26433050324  
Status : Answered  
Chosen Option : 4

**Q.23** The largest possible right circular cylinder is cut out from a wooden cube of edge 7 cm. Find the volume of the cube left over after cutting the cylinder (in cm). (use  $\pi = \frac{22}{7}$ )

- Ans
- 1.
  - 2. 63.5
  - 3. 87.5
  - 4. 67.5

Question ID : 26433050391  
Status : Answered  
Chosen Option : 1



**Q.24** Two beakers contain acid and water in the ratio 2 : 3 and 3 : 4 respectively. If equal volumes of the mixtures from these two beakers are poured into a common beaker, find the resultant ratio of acid to water in the mixture in the common beaker.

- Ans**
- 1.
  - 2. 21 : 29
  - 3. 5 : 7
  - 4. 29 : 41

Question ID : 26433050172  
Status : Answered  
Chosen Option : 4

**Q.25** The radius of a circular wheel of a toy car is 56 mm. In how many revolutions can it cover a distance of 176 cm?

[Use  $\pi = \frac{22}{7}$ ]

- Ans**
- 1.
  - 2. 3
  - 3. 5
  - 4. 4

Question ID : 26433049340  
Status : Answered  
Chosen Option : 3

Section : General Awareness

**Q.1** 'The Kiss of Life' is the autobiography of who among the following persons?

- Ans**
- 1. Sanjay Suri
  - 2. John Abraham
  - 3. Dino Morea
  - 4. Emraan Hashmi

Question ID : 26433047585  
Status : Answered  
Chosen Option : 4

**Q.2** In which state of India is Bhogali Bihu festival celebrated?

- Ans**
- 1. Assam
  - 2. Andhra Pradesh
  - 3. Rajasthan
  - 4. Tamil Nadu

Question ID : 26433047671  
Status : Answered  
Chosen Option : 1



Q.3 Paika is a martial folk dance popular in which of the following states?

- Ans  1. Kerala  
 2. Andhra Pradesh  
 3. Gujarat  
 4. Odisha

Question ID : 26433047445  
Status : Not Answered  
Chosen Option : --

Q.4 Who is the author of the book 'Pride, Prejudice, and Punditry'?

- Ans  1. Manish Sisodia  
 2. Pranab Mukherjee  
 3. Amitav Ghosh  
 4. Shashi Tharoor

Question ID : 26433047569  
Status : Answered  
Chosen Option : 2

Q.5 Which of the following statements is INCORRECT?

- Ans  1. A post-anal tail is present in Chordates.  
 2. Mollusca is the largest animal phylum.  
 3. Ctenophores are commonly known as sea walnuts.  
 4. Locust is an example of Arthropoda.

Question ID : 26433046725  
Status : Answered  
Chosen Option : 2

Q.6 Which of the following teams won the Ranji trophy for the year 2019-20?

- Ans  1. Mumbai  
 2. Bengal  
 3. Baroda  
 4. Saurashtra

Question ID : 26433047165  
Status : Answered  
Chosen Option : 3



Q.7 नवंबर की शु आत म िन दबाव वाली अव5था बंगाल की खाड़ी पर 5थानांत रत हो जाती है। यह 5थानांतरण च वाती िन दाब से संबंिधत है, जोिक \_\_\_\_\_ के ऊपर उ होता है।

- Ans  1. अंडमान सागर  
 2. जापान सागर  
 3. कै ि4यन सागर  
 4. शांत महासागर

Question ID : 26433047851  
Status : Not Answered  
Chosen Option : --

Q.8 In which of the following years was the Preamble of the Indian Constitution first amended?

- Ans  1. 1968  
 2. 1955  
 3. 1976  
 4. 1988

Question ID : 26433047863  
Status : Answered  
Chosen Option : 3

Q.9 लायन कै िपटल का िनमाण बु5 के \_\_\_की ऐतिहासिक घटना की 4ृति म बनाया गया था।

- Ans  1. घर प र्वाग  
 2. यान ाि™  
 3. िनधन  
 4. पहले उपदेश

Question ID : 26433047847  
Status : Answered  
Chosen Option : 4

Q.10 Which of the following rivers is also known as 'Bhagirathi' at the place of its origin?

- Ans  1. Brahmaputra  
 2. Yamuna  
 3. Indus  
 4. Ganga

Question ID : 26433046728  
Status : Answered  
Chosen Option : 4



Q.11 Which of the following railway zones has recently completed 100% electrification of its entire route?

- Ans  1. South Central Railway  
 2. Konkan Railway  
 3. Harbour Railway  
 4. North Eastern Railway

Question ID : 26433047843  
Status : Answered  
Chosen Option : 2

Q.12 Who of the following founded the Atmiya Samaj?

- Ans  1. Swami Vivekananda  
 2. Bhimrao Ramji Ambedkar  
 3. Raja Ram Mohan Roy  
 4. Dayananda Saraswati

Question ID : 26433046733  
Status : Answered  
Chosen Option : 3

Q.13 Aparna Satheesan, who won the prestigious National Nritya Shiromani Award 2022, is associated with which of the following dance forms?

- Ans  1. Sattriya  
 2. Kuchipudi  
 3. Mohiniattam  
 4. Kathak

Question ID : 26433046737  
Status : Not Answered  
Chosen Option : --

Q.14 \_\_\_\_\_ is a motion moved by a member to cut short the debate on a matter before the House.

- Ans  1. Closure  
 2. No-Confidence  
 3. Privilege  
 4. Censure

Question ID : 26433046739  
Status : Answered  
Chosen Option : 1



Q.15 The Battle of Khanwa was fought between:

- Ans  1. Babur and Ibrahim Lodi  
 2. Babur and Rana Sangha  
 3. Sher Shah Suri and Rana Sangha  
 4. Babur and Sher Shah Suri

Question ID : 26433047857  
Status : Answered  
Chosen Option : 2

Q.16 Which of the following is the oldest Veda?

- Ans  1. Rigveda  
 2. Atharvaveda  
 3. Samaveda  
 4. Yajurveda

Question ID : 26433047581  
Status : Answered  
Chosen Option : 1

Q.17 नीचे दिए गए कथनों में से कौन-सा कथन सही है?

- I. वनों की कटाई से वायु में CO<sub>2</sub> की मात्रा में कमी आती है।  
II. CO<sub>2</sub> ऊष्मा को बाँध लेता है और इसे वायु में नहीं निकलने देता।

- Ans  1. केवल I  
 2. न तो I और न ही II  
 3. I और II दोनों  
 4. केवल II

Question ID : 26433047450  
Status : Answered  
Chosen Option : 4

Q.18 Who became the first Governor-General of India in 1773?

- Ans  1. Robert Clive  
 2. Warren Hastings  
 3. Thomas Munro  
 4. Charles Cornwallis

Question ID : 26433047459  
Status : Answered  
Chosen Option : 2



Q.19 Which of the following is NOT an institutional factor for agriculture?

- Ans  1. Land reforms  
 2. Electricity  
 3. Size of fields  
 4. Land tenure

Question ID : 26433047852  
Status : Answered  
Chosen Option : 2

Q.20 As per the 2011 census, which of the following states of India has the least population?

- Ans  1. Sikkim  
 2. Bihar  
 3. Kerala  
 4. Chhattisgarh

Question ID : 26433047030  
Status : Answered  
Chosen Option : 1

Q.21 Pandit Ram Narayan was associated with which musical instrument?

- Ans  1. Flute  
 2. Sarod  
 3. Sarangi  
 4. Guitar

Question ID : 26433047586  
Status : Not Answered  
Chosen Option : --

Q.22 Which of the following is an example of emulsion?

- Ans  1. Milk  
 2. Mist  
 3. Gemstone  
 4. Clouds

Question ID : 26433047673  
Status : Answered  
Chosen Option : 1



Q.23 India won the bronze medal (the only one won by India) in which team sports at the Tokyo Olympics 2020?

- Ans
- 1. Basketball
  - 2. Field hockey
  - 3. Badminton
  - 4. Table tennis

Question ID : 26433047740  
Status : Answered  
Chosen Option : 2

Q.24 \_\_\_\_\_ won the women's singles title at the Swiss Open Super 300 badminton tournament 2022.

- Ans
- 1. PV Sindhu
  - 2. Kirsty Gilmour
  - 3. Ashmita Chaliha
  - 4. Busanan Ongbamrunphan

Question ID : 26433047592  
Status : Not Answered  
Chosen Option : --

Q.25 According to the census 2011, the second highest populated metro in India is:

- Ans
- 1. Bengaluru
  - 2. Chennai
  - 3. Delhi
  - 4. Mumbai

Question ID : 26433047779  
Status : Answered  
Chosen Option : 3

### Thank You Note

A big thank you to all students and digital platforms for sharing previous years' question papers for the Multi-Tasking Staff Havaladar CBIC and CBN Examination. The credit goes to each of you for supporting candidates in their preparation. In good faith, this content is being shared free of cost to assist others. Mock360 wishes you the very best in your preparation and success in the exam!

